





Addition






Worksheet-1

30-04-2021




Fill in the boxes with numbers.

1.  and  is equal to 


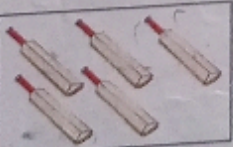

$$\boxed{4} + \boxed{2} = \boxed{6}$$

2.  and  is equal to 




$$\boxed{6} + \boxed{3} = \boxed{9}$$

3.  and  is equal to 

$$\boxed{3} + \boxed{3} = \boxed{6}$$

4.  and  is equal to 

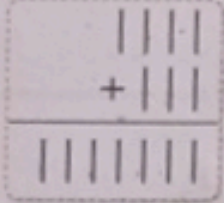
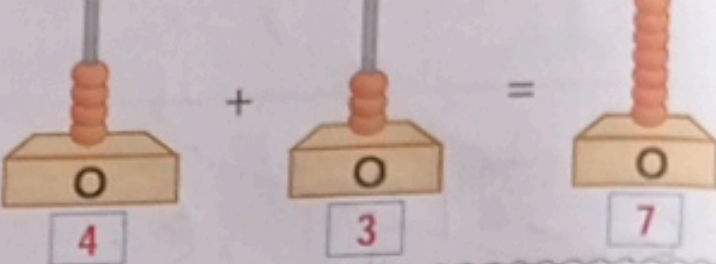
$$\boxed{2} + \boxed{5} = \boxed{7}$$

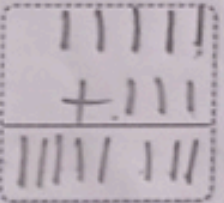
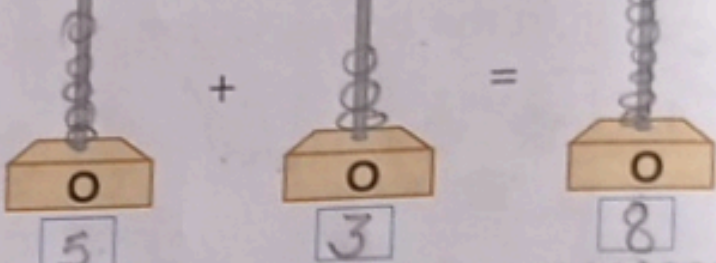
5.  and  is equal to 

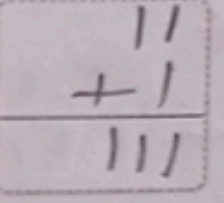
$$\boxed{4} + \boxed{3} = \boxed{7}$$


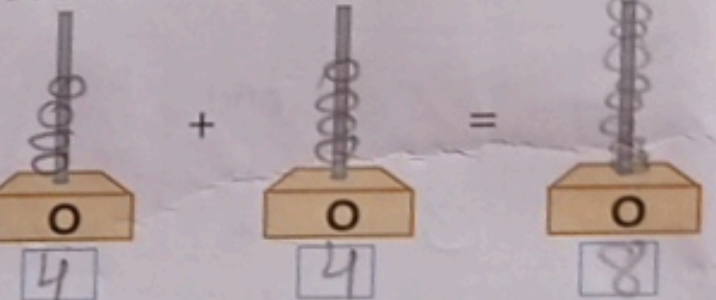
Worksheet-2

1. Draw strokes and add :

(a)
$$\begin{array}{r} 4 \\ + 3 \\ \hline 7 \end{array}$$
  \Rightarrow 

(b)
$$\begin{array}{r} 5 \\ + 3 \\ \hline 8 \end{array}$$
  \Rightarrow 

(c)
$$\begin{array}{r} 2 \\ + 1 \\ \hline 3 \end{array}$$
  \Rightarrow 

(d)
$$\begin{array}{r} 4 \\ + 4 \\ \hline 8 \end{array}$$
  \Rightarrow 

2. Put a (✓) tick mark on the correct sum :

$1 + 3 = 4$ ✓

$2 + 5 = 7$ ✓

$3 + 4 = 8$ ✗

$6 + 2 = 8$ ✓

$2 + 1 = 4$ ✗

$4 + 5 = 8$ ✗

$2 + 2 = 5$ ✗

$4 + 4 = 8$ ✓

$3 + 3 = 7$ ✗